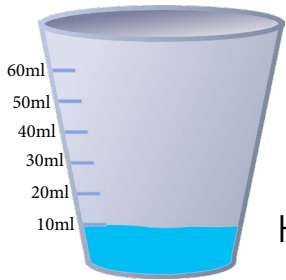


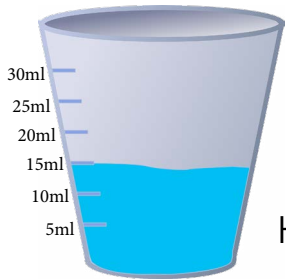
This math for 2nd class worksheet will improve your subject concept and improve your grades.

Measurement

Answer the following questions.



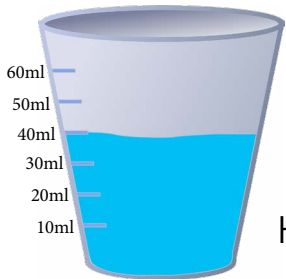
How many ____ ml?




How many ____ ml?



How many ____ ml?



How many ____ ml?



How many ____ cm?



How many ____ cm?



How many ____ cm?



How many ____ cm?