

Counting in Tens and Ones

Find the total number of blocks and write them as a number and as Tens and Ones.

Base 10 blocks

	Tens	Ones
56	5	6

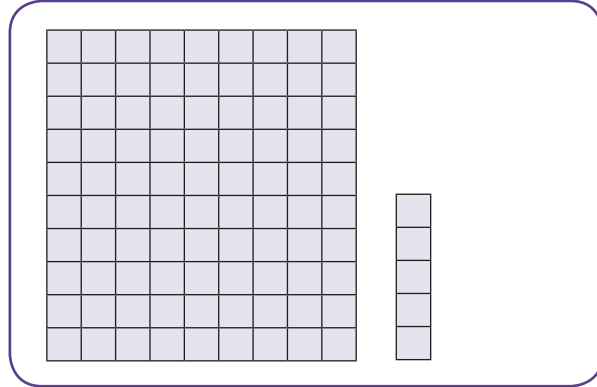
	Tens	Ones
33		

	Tens	Ones
84		

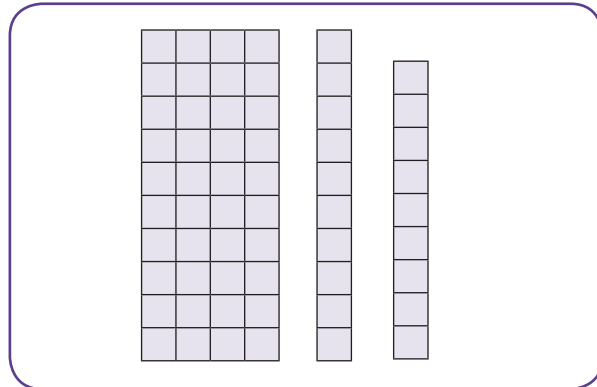
	Tens	Ones
	9	3

	Tens	Ones
72		2

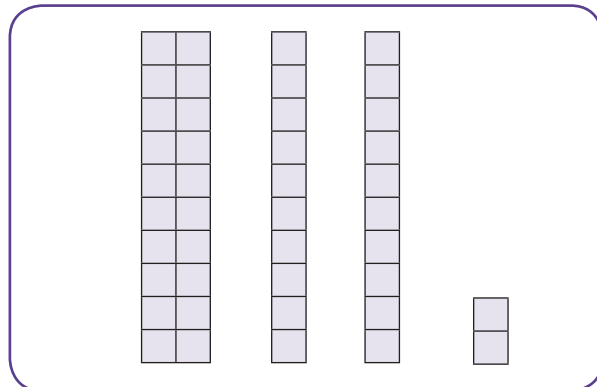
	Tens	Ones
66		



Tens	Ones



Tens	Ones



Tens	Ones

© Copyright 2017 BeeOne Media Pvt. Ltd. All Rights Reserved.

