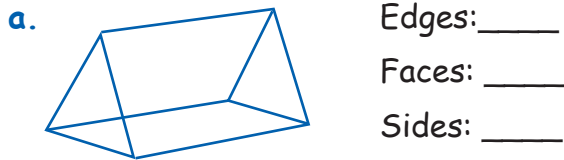


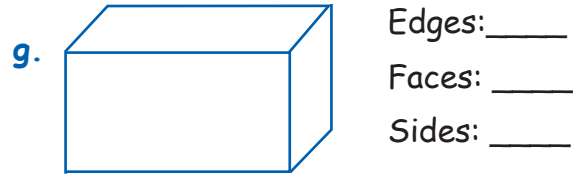
# Shapes: Edges Faces, Sides

Write the number of **edges**, **faces** and **sides**.



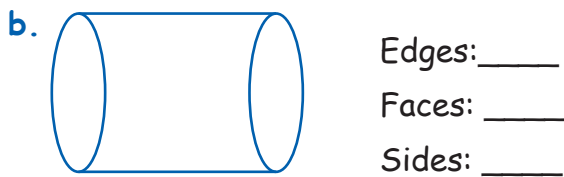
Edges: \_\_\_\_\_  
Faces: \_\_\_\_\_  
Sides: \_\_\_\_\_

Name: \_\_\_\_\_



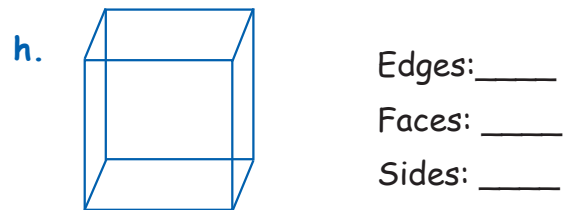
Edges: \_\_\_\_\_  
Faces: \_\_\_\_\_  
Sides: \_\_\_\_\_

Name: \_\_\_\_\_



Edges: \_\_\_\_\_  
Faces: \_\_\_\_\_  
Sides: \_\_\_\_\_

Name: \_\_\_\_\_



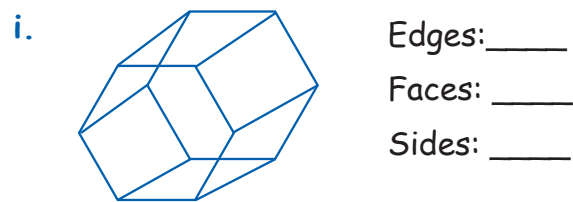
Edges: \_\_\_\_\_  
Faces: \_\_\_\_\_  
Sides: \_\_\_\_\_

Name: \_\_\_\_\_



Edges: \_\_\_\_\_  
Faces: \_\_\_\_\_  
Sides: \_\_\_\_\_

Name: \_\_\_\_\_



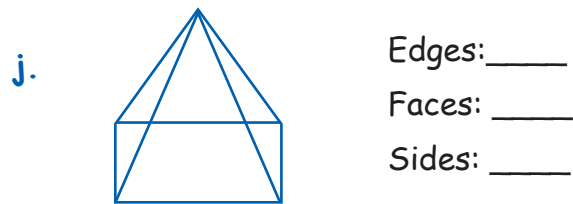
Edges: \_\_\_\_\_  
Faces: \_\_\_\_\_  
Sides: \_\_\_\_\_

Name: \_\_\_\_\_




Edges: \_\_\_\_\_  
Faces: \_\_\_\_\_  
Sides: \_\_\_\_\_

Name: \_\_\_\_\_



Edges: \_\_\_\_\_  
Faces: \_\_\_\_\_  
Sides: \_\_\_\_\_

Name: \_\_\_\_\_



Edges: \_\_\_\_\_  
Faces: \_\_\_\_\_  
Sides: \_\_\_\_\_

Name: \_\_\_\_\_



Edges: \_\_\_\_\_  
Faces: \_\_\_\_\_  
Sides: \_\_\_\_\_

Name: \_\_\_\_\_

