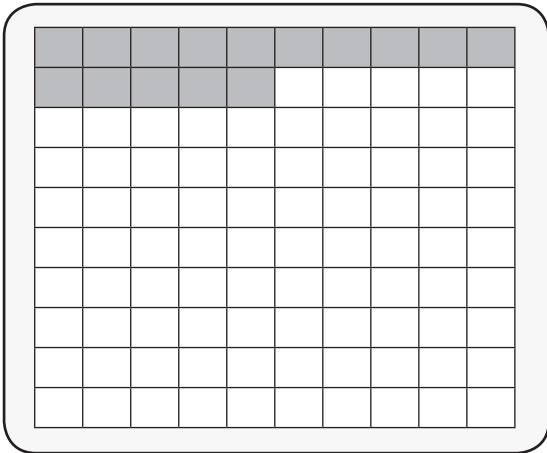


Fraction, Decimal and Percentage

See the shaded part of the image, write that in a Fraction, Decimals and Percentage form.

1.



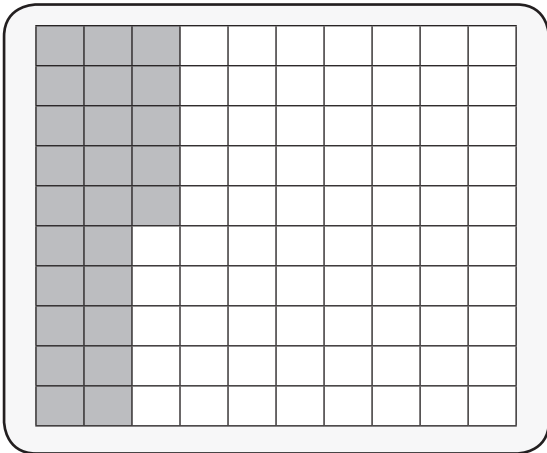
Fraction

$$\frac{15}{100}$$

Decimal

Percentage

2.



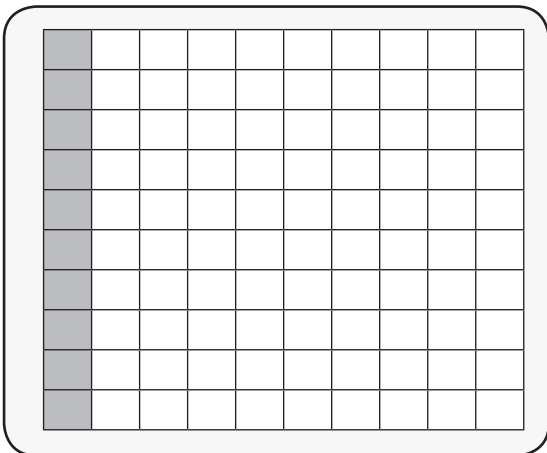
Fraction

$$\frac{10}{100}$$

Decimal

Percentage

3.



Fraction

$$\frac{10}{100}$$

Decimal

Percentage

