


Counting Objects

Count the number of objects in each sections and circle the correct number.



1 2 3 **4** 5 6 7



1 2 3 4 5 6 7



1 2 3 4 5 6 7




1 2 3 4 5 6 7




4 5 6 7 8 9 10



1 2 3 4 5 6 7



1 2 3 4 5 6 7



1 2 3 4 5 6 7

