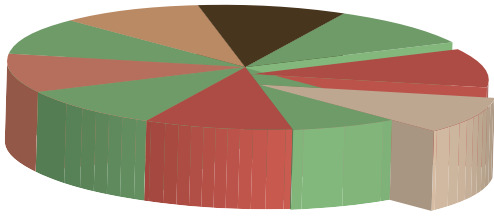
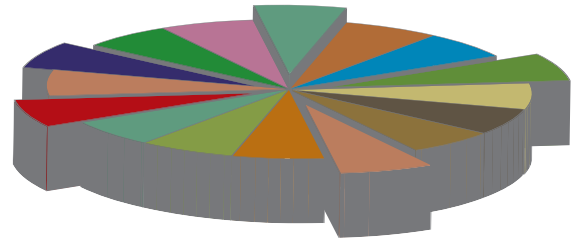


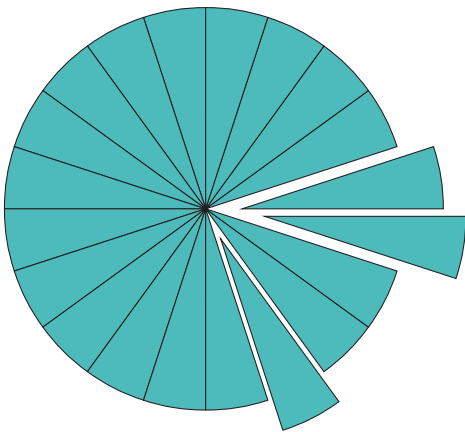
# Word Problems



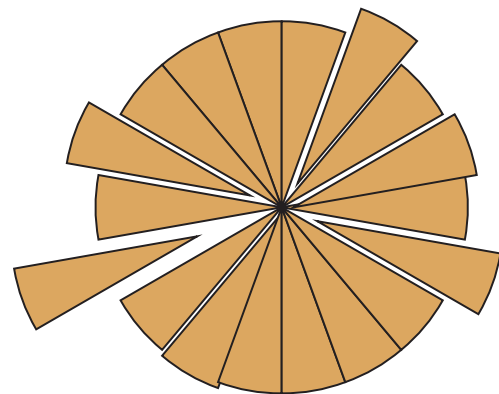
1. The baker cut a cake in 10 equal pieces. I ate  $\frac{1}{5}$  of the pieces. How many pieces did I eat?



2. The baker cut a cake in 16 equal pieces. I ate  $\frac{1}{4}$  of the pieces. How many pieces did I eat?



3. The baker cut a cake in 20 equal pieces. I ate half of the pieces. How many pieces did I eat?



4. The baker cut a cake in 18 equal pieces. I ate  $\frac{1}{3}$ rd of the pieces. How many pieces did I eat?

