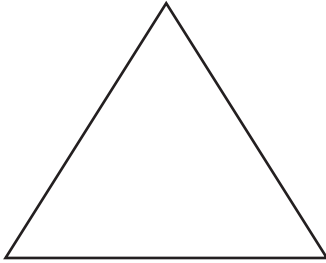


Naming Polygons

Write the name & numbers of line each shape.

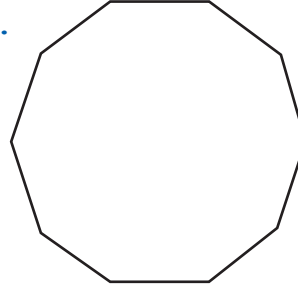
a.



Name:

Number of lines:

e.



Name:

Number of lines:

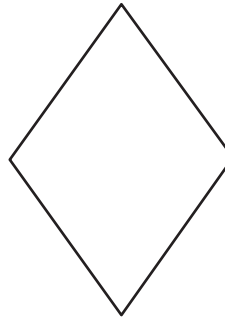
b.



Name:

Number of lines:


f.



Name:

Number of lines:

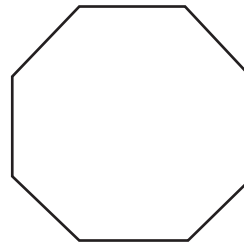
c.



Name:

Number of lines:

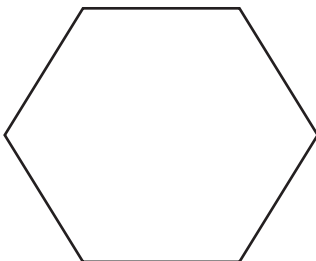
g.



Name:

Number of lines:

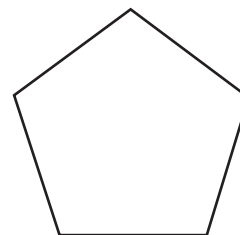
d.



Name:

Number of lines:

h.



Name:

Number of lines:

