



Multiplication & Division

1. Divide these flowers into 5 equal groups:




$$\boxed{} \div \boxed{} = \boxed{}$$

2. Divide these fish into 4 equal groups:



$$\boxed{} \div \boxed{} = \boxed{}$$

3. Divide these dogs into 6 equal groups:



$$\boxed{} \div \boxed{} = \boxed{}$$

Answer key:

1. $20 \div 5 = 4$

2. $16 \div 4 = 4$

3. $12 \div 6 = 2$