




# Multiplication & Division

Share between 2	How many does each person get?	What does the calculation look like?
	<div>4</div> <div>6</div> <div>5</div> <div>2</div>	<div>□</div> ÷ <div>□</div> = <div>□</div>

Share between 4	How many does each person get?	What does the calculation look like?
	<div>2</div> <div>4</div> <div>2</div> <div>2</div>	<div>□</div> ÷ <div>□</div> = <div>□</div>

Share between 3	How many does each person get?	What does the calculation look like?
	<div>6</div> <div>9</div> <div>4</div> <div>3</div>	<div>□</div> ÷ <div>□</div> = <div>□</div>

## Answer key:

1. 5  
 $10 \div 5 = 2$

2. 4  
 $16 \div 4 = 4$

3. 3  
 $12 \div 4 = 3$