


Geometry

Open and closed shapes

1. Is this shape **open** or **closed**?

a.



open



closed

b.

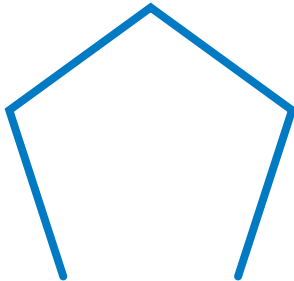


open



closed

c.




open



closed

d.



open



closed

Answer key:

a. Closed

b. Open

c. Open

d. Closed