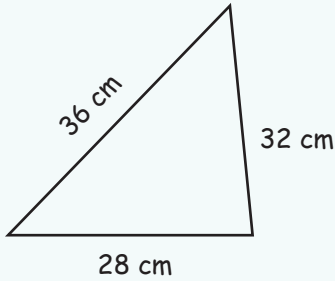
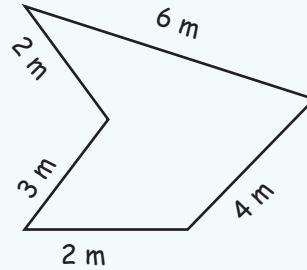


Perimeter



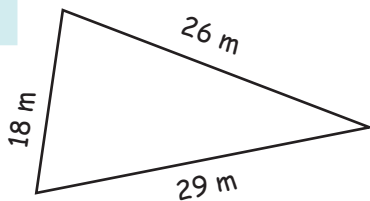
$$\begin{aligned}\text{Perimeter: } &= 36 + 32 + 28 \\ &= 96 \text{ cm}\end{aligned}$$



$$\begin{aligned}\text{Perimeter: } &= 6 + 4 + 2 + 3 + 2 \\ &= 17 \text{ m}\end{aligned}$$

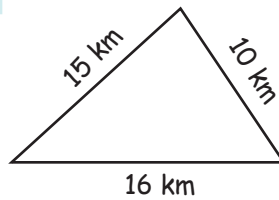
Find the perimeter of each shapes.

i.



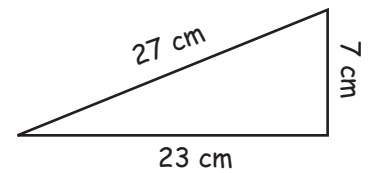
Perimeter:

ii.



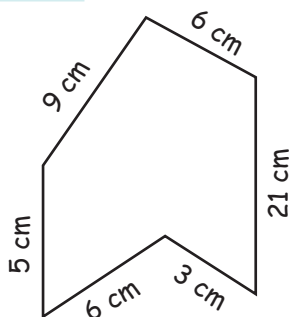
Perimeter:

iii.



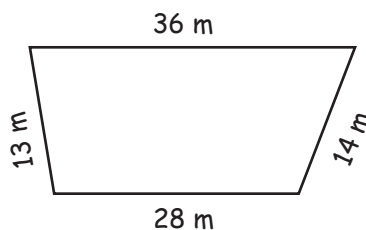
Perimeter:

iv.



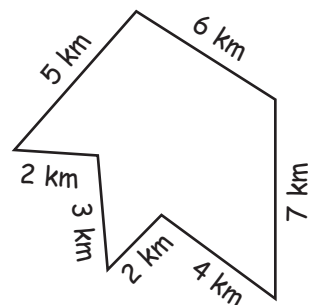
Perimeter:

v.



Perimeter:

vi.



Perimeter:
