

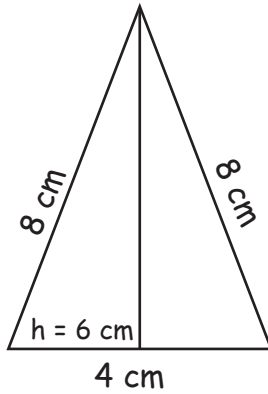
Area of Triangles

Find the area of these triangles.

Formula: -

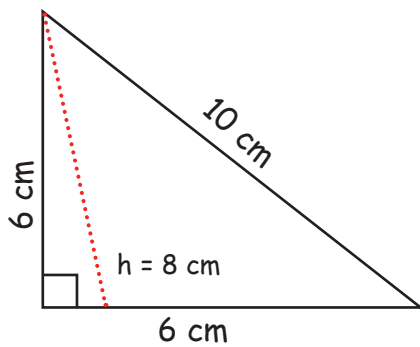
$$\text{area} = \frac{1}{2} \times \text{base} \times \text{height}$$

a.



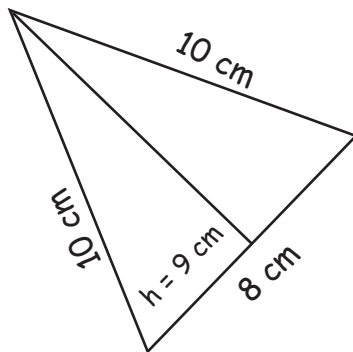
Area: $\frac{1}{2} \times 4 \times 6 = 12 \text{sq cm.}$

b.



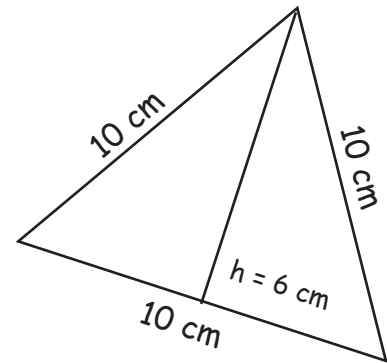
Area:

c.



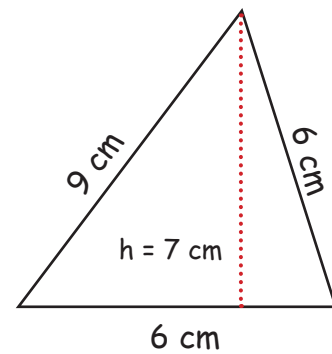
Area:

d.



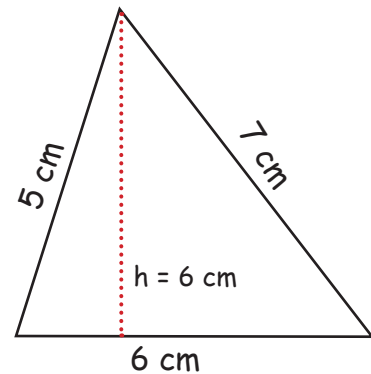
Area:

e.



Area:

f.



Area:

