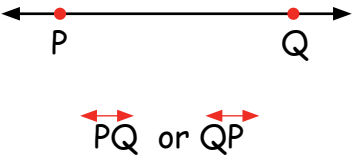
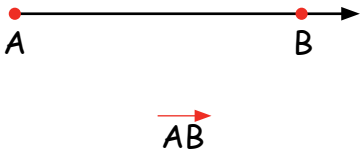
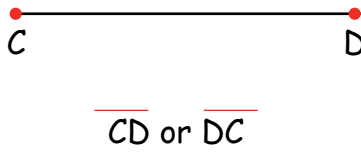


Point, Lines and Angles

Points & Lines

A Line	A Ray	A Line segment
		
<p>A line is a straight set of points that extend in opposite directions without ending.</p>	<p>A ray is a part of a line that has one endpoint and extends in one direction without ending.</p>	<p>A line segment is a part of a line between two endpoints.</p>

See the figure and write the answer in following questions:

i. Write the name in any two rays.

ii. Write the name in all points.

iii. Write any two line segment name.

iv. What is called QU?

v. What is called Q?

