
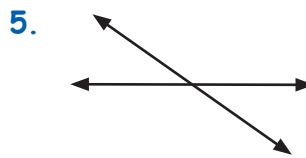
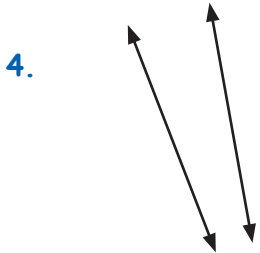
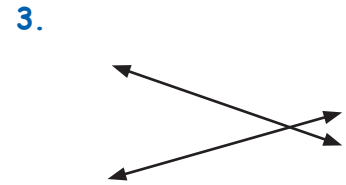
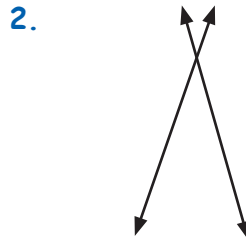
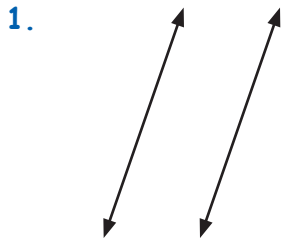


Parallel, Perpendicular and Intersecting Lines

Identify Parallel, Perpendicular and Intersecting Lines.



Identify Parallel, Perpendicular and Intersecting Lines.

1. Line PQ and line GH are _____ line.

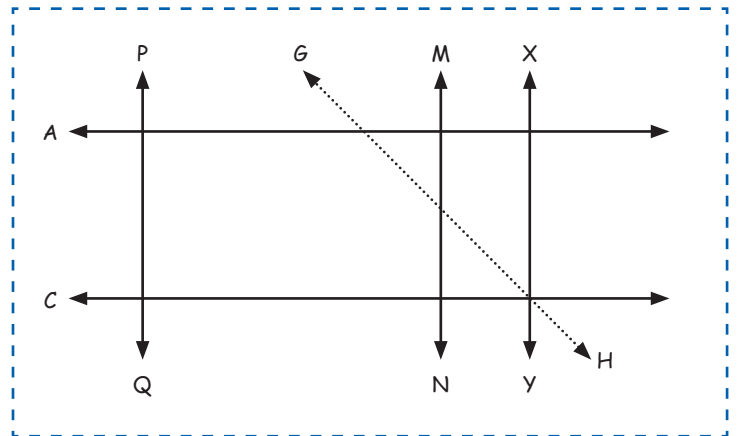
2. Line PQ and line MN are _____ line.

3. Line CD and line XY are _____ line.

4. Line AB and line GH are _____ line.

5. Line PQ and line XY are _____ line.

6. Line CD and line MN are _____ line.



7. Line AB and line CD are _____ line.

8. Line MN and line GH are _____ line.

9. Line MN and line XY are _____ line.

