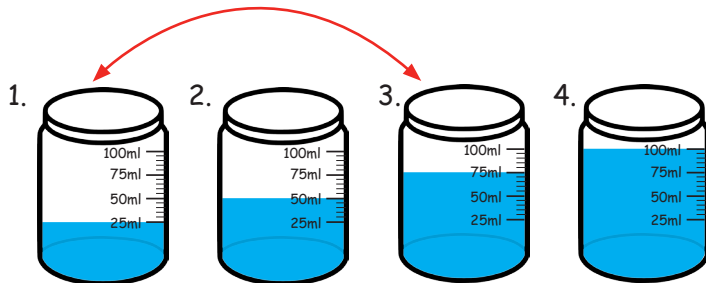


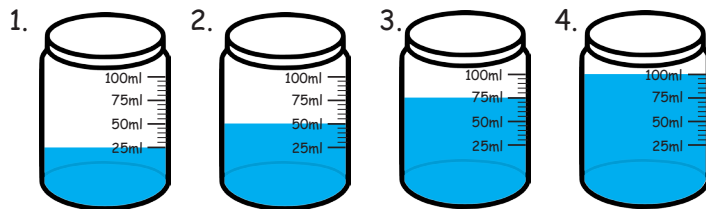
# Measurement

Calculate the total volume of the liquid in different containers and write the total.

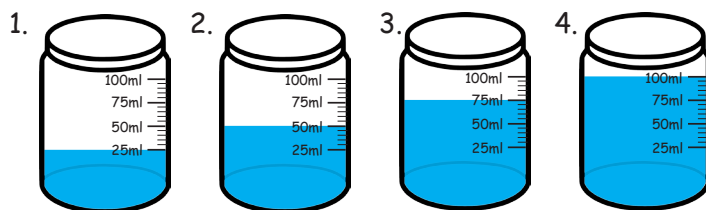


$$1 + 2 = \underline{75\text{ml}}$$

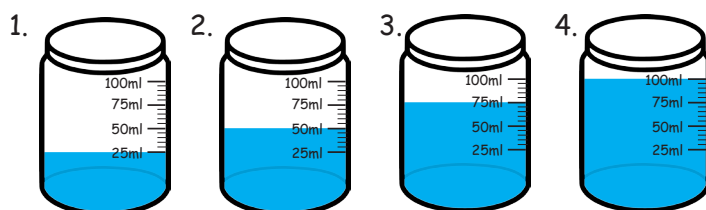
$$25 + 50 = 75\text{ml}$$



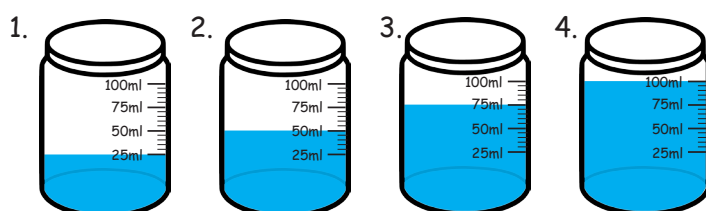
$$1 + 3 = \underline{\hspace{2cm}}$$



$$1 + 4 = \underline{\hspace{2cm}}$$



$$2 + 3 = \underline{\hspace{2cm}}$$



$$2 + 4 = \underline{\hspace{2cm}}$$

