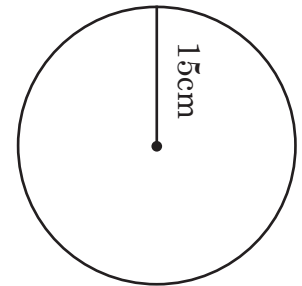
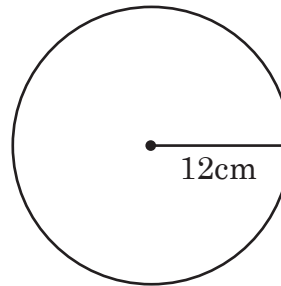
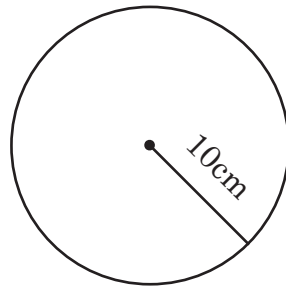
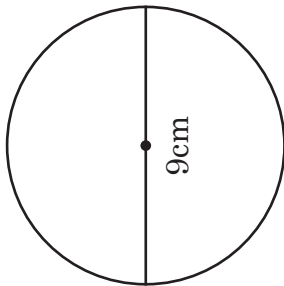
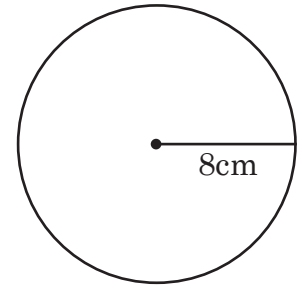
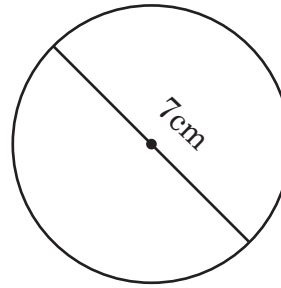
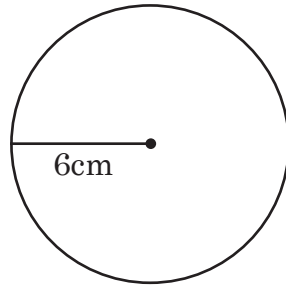
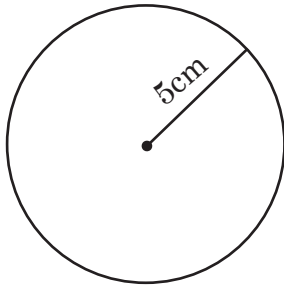
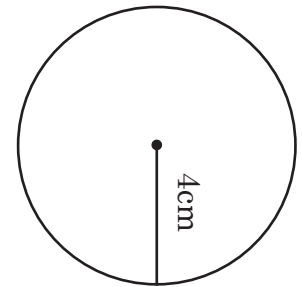
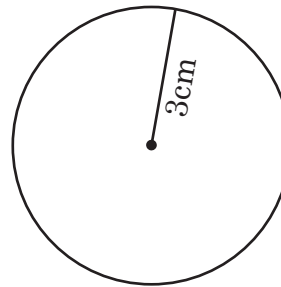
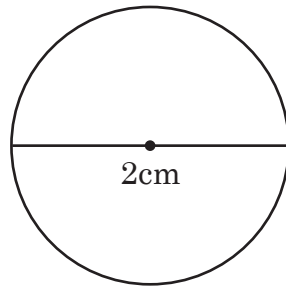
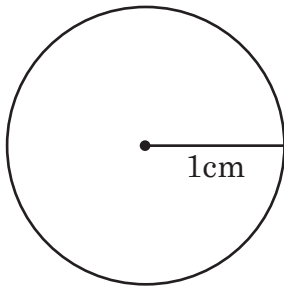


These worksheets for Class 4 Maths, CBSE / NCERT / SCERT will improve your subject concept and improve your grades.

Area and Circumference

Fill in the blanks.



- | | |
|---|--|
| 1. Which circle has a radius of 2 cm _____ | 7. Which circle has a Circumference of 6.28 cm _____ |
| 2. Which circle has a radius of 3 cm _____ | 8. Which circle has a Circumference of 43.98 cm _____ |
| 3. Which circle has a radius of 8 cm _____ | 9. Which circle has a Circumference of 50.26 cm _____ |
| 4. Which circles has a diameter of 2 cm _____ | 10. Which circle has a Circumference of 94.24 cm _____ |
| 5. Which circle has a diameter of 9 cm _____ | 11. Which circle has a Circumference of 75.38 cm _____ |
| 6. Which circle has a diameter of 7 cm _____ | |

