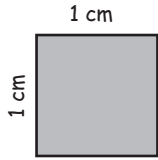


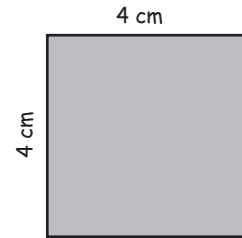
Area of Shapes

Calculate the area of the shapes given below.



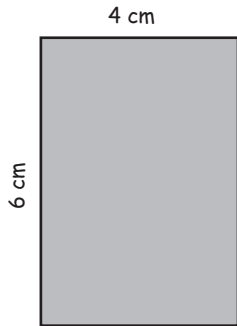
Area is _____

a.



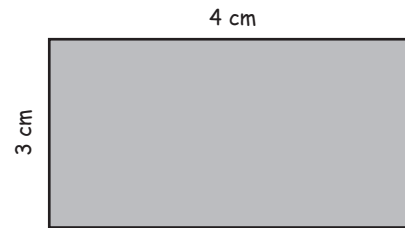
Area is _____

b.



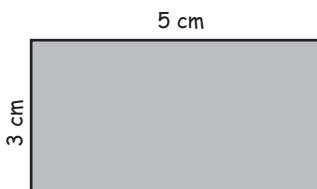
Area is _____

c.



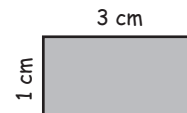
Area is _____

d.



Area is _____

e.



Area is _____

