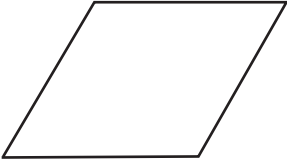


Identifying Quadrilaterals


Identify the quadrilaterals and write their names below.

a.



.....

b.



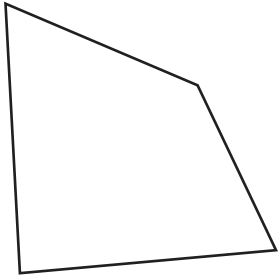
.....

c.



.....

d.



.....

e.



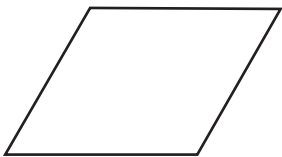
.....

f.




.....

g.



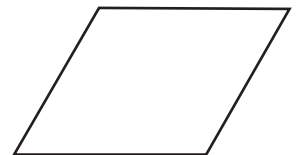
.....

h.



.....

i.



.....

