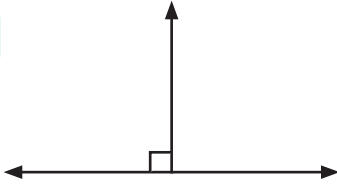


Angles

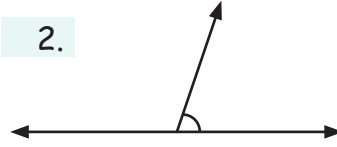
Measure all the following angle and write in the blank box:

1.



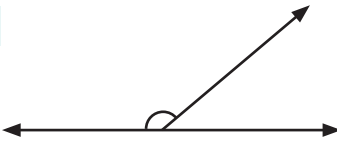
∠ _____

2.




∠ _____

3.



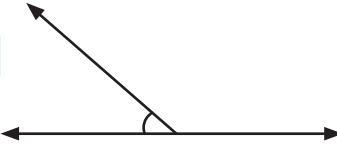
∠ _____

4.



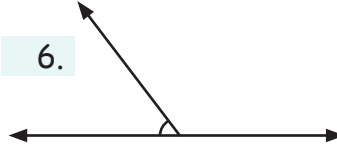
∠ _____

5.



∠ _____

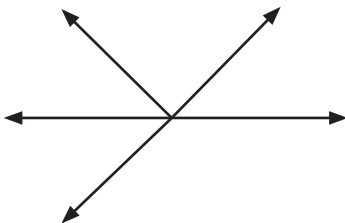
6.



∠ _____

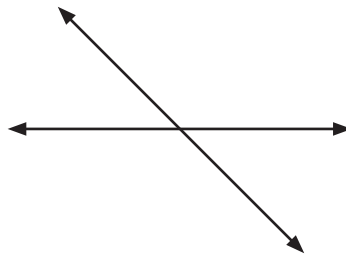
Measure all the following angles and write below:

1.



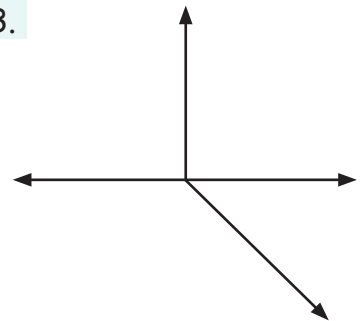
∠ _____°, ∠ _____°, ∠ _____°,
∠ _____°, ∠ _____°

2.



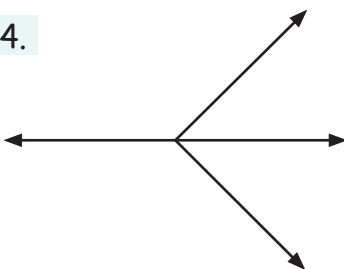
∠ _____°, ∠ _____°,
∠ _____°, ∠ _____°

3.



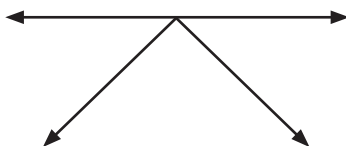
∠ _____°, ∠ _____°,
∠ _____°, ∠ _____°

4.



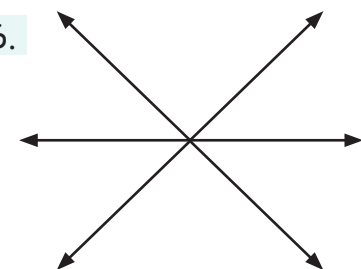
∠ _____°, ∠ _____°,
∠ _____°, ∠ _____°

5.



∠ _____°, ∠ _____°,
∠ _____°, ∠ _____°

6.



∠ _____°, ∠ _____°,
∠ _____°, ∠ _____°