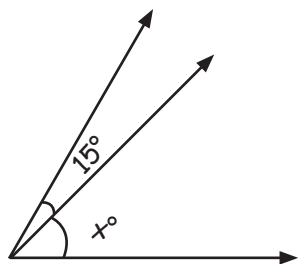


Angles at a Point or on a Line

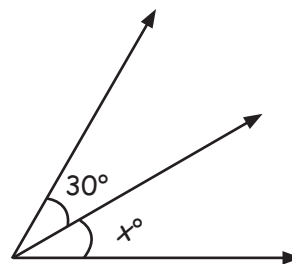
Find the value of $\angle x^\circ$ in the following. Don't use Protractor.

1.



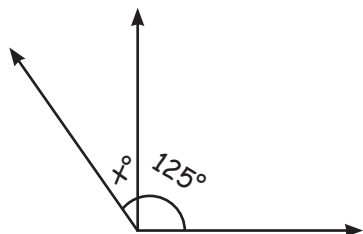
$\angle x^\circ =$

2.



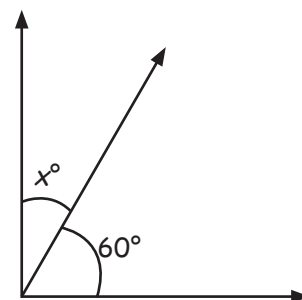
$\angle x^\circ =$

3.



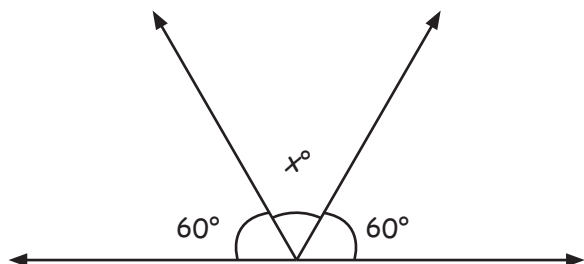
$\angle x^\circ =$

4.



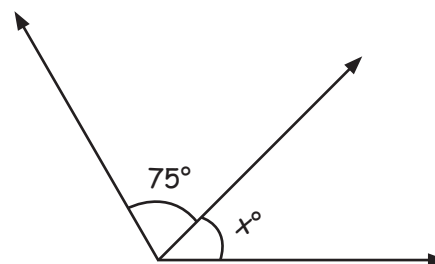
$\angle x^\circ =$

5.



$\angle x^\circ =$

6.



$\angle x^\circ =$