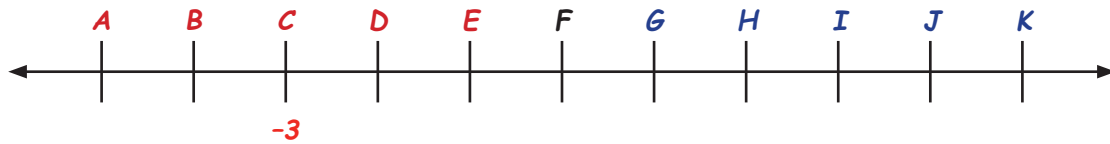
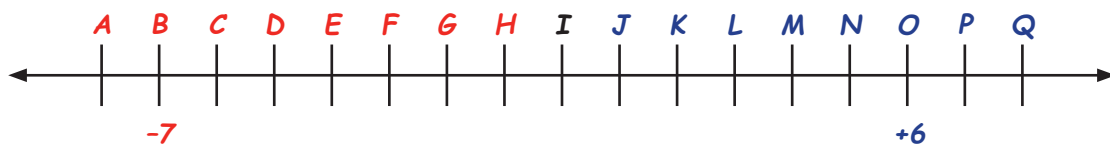


Integers on a Number Line

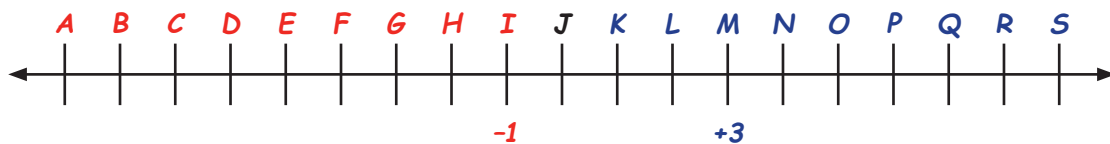
1. Name the integer that matches each point on the number line.



- | | | | | | |
|--------|-----------|-------|-------|---------|-------|
| i. A | _____ | iv. E | _____ | vii. H | _____ |
| ii. B | _____ | v. F | _____ | viii. J | _____ |
| iii. C | <u>-3</u> | vi. G | _____ | ix. K | _____ |



- | | | | | | |
|--------|-------|---------|-------|--------|-------|
| i. A | _____ | v. K | _____ | ix. F | _____ |
| ii. C | _____ | vi. M | _____ | x. G | _____ |
| iii. E | _____ | vii. L | _____ | xi. I | _____ |
| iv. P | _____ | viii. Q | _____ | xii. J | _____ |



- | | | | | | |
|--------|-------|---------|-------|----------|-------|
| i. S | _____ | vii. P | _____ | xiii. C | _____ |
| ii. R | _____ | viii. O | _____ | xiv. F | _____ |
| iii. E | _____ | ix. B | _____ | xv. J | _____ |
| iv. D | _____ | x. G | _____ | xvi. L | _____ |
| v. A | _____ | xi. N | _____ | xvii. M | _____ |
| vi. K | _____ | xii. H | _____ | xviii. Q | _____ |