


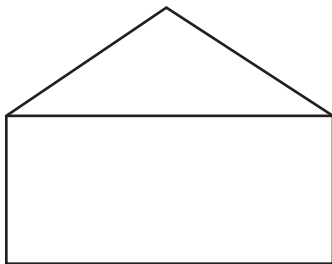
Euler's Rule for Plane Figures

Find the number of **vertices**, **faces** and **edges** for the figure.



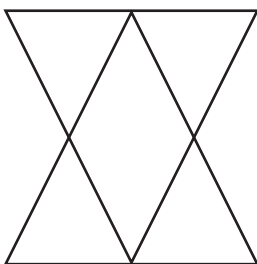
| Vertices | Faces | Edges |
|----------|-------|-------|
| | | |

Find the number of **vertices**, **faces** and **edges** for the figure.



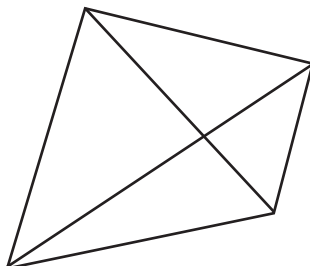
| Vertices | Faces | Edges |
|----------|-------|-------|
| | | |

Find the number of **vertices**, **faces** and **edges** for the figure.



| Vertices | Faces | Edges |
|----------|-------|-------|
| | | |

Find the number of **vertices**, **faces** and **edges** for the figure.



| Vertices | Faces | Edges |
|----------|-------|-------|
| | | |