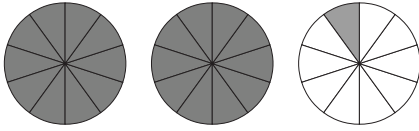


Convert Fractions to Decimals

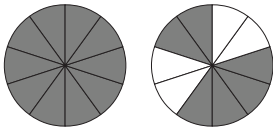
Write decimal value and mixed fraction number for the shaded parts in each of the diagram.

i.

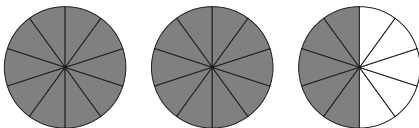


2.1, $2\frac{1}{10}$

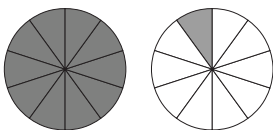
ii.



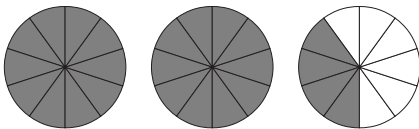
iii.



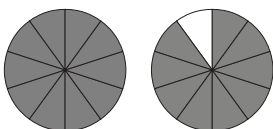
iv.



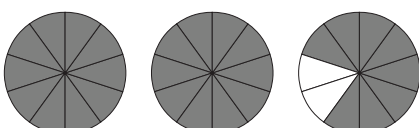
v.



vi.



vii.



viii.

