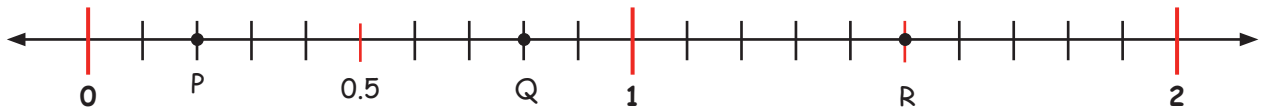


Decimal - Number Line

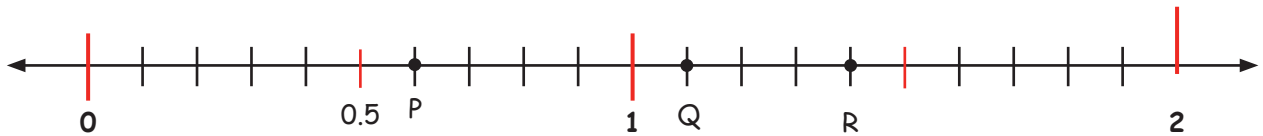
Find the decimal values of P, Q and R mark on the number line shown.



$P = 0.2$

$Q = 0.8$

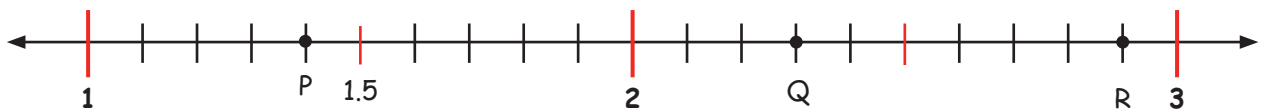
$R = 1.5$



$P =$

$Q =$

$R =$



$P =$

$Q =$

$R =$



$P =$

$Q =$

$R =$