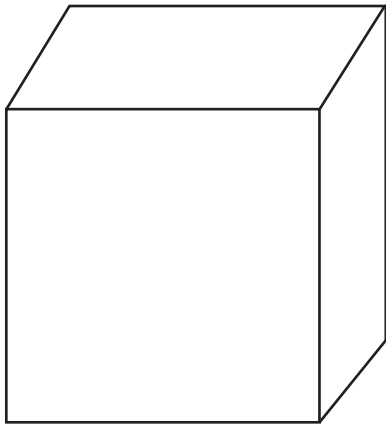


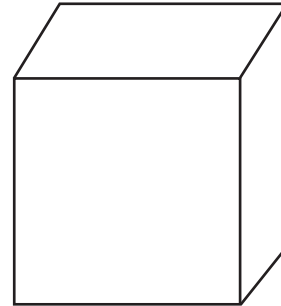
Volume and Surface Area

Find the answer:



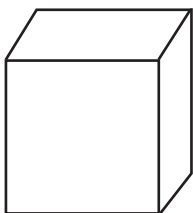
The surface area of this cube is 54 square units. What is its edge length?

\_\_\_\_\_



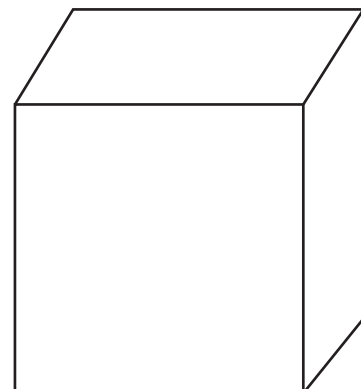
The volume of this cube is 96 cubic units. What is its surface area?

\_\_\_\_\_



The volume of this cube is 294 cubic units. What is its surface area?

\_\_\_\_\_



The volume of this cube is 150 cubic units. What is its edge length?

\_\_\_\_\_