








Telling the Time

What is the time interval between these pairs of clocks?



Draw the clocks and show the following times.

a. 8.15

b. 22.30

c. 15.15